

Name:

Answers!


Class:



Communication



Successful Partnership



Encouragement

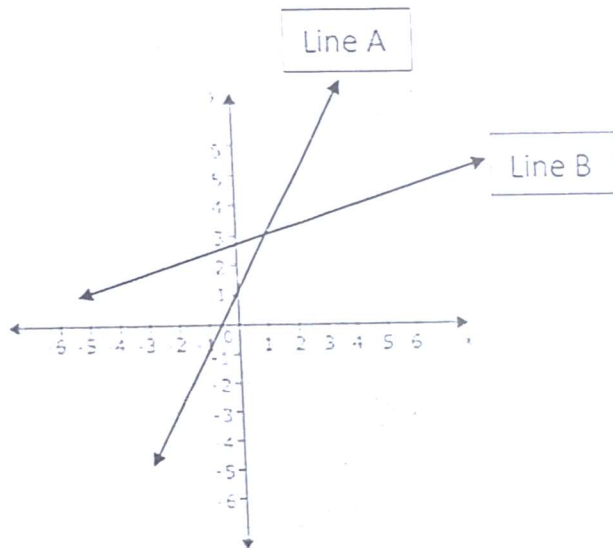


Solving Problem Together



Collaboration

Question 01



01. How many solutions are there to the system of equations to the left?

- (a) One solution
- (b) No solutions
- (c) Infinite solutions

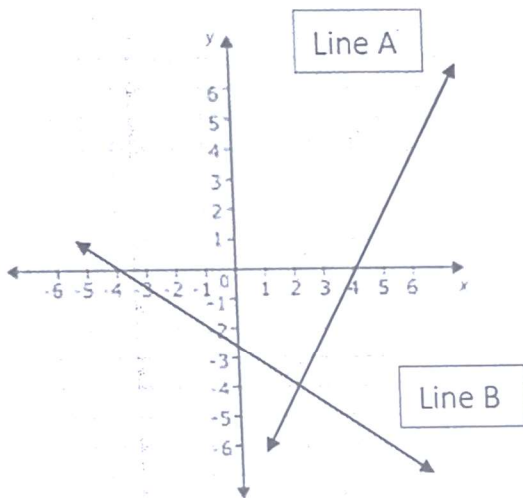
02. Do both lines have different slopes?

- (a) Yes
- (b) No

03. What is the solution to the system of equations to the left?

(1 , 3)

Question 02



01. How many solutions are there to the system of equations to the left?

- (d) One solution
- (e) No solutions
- (f) Infinite solutions

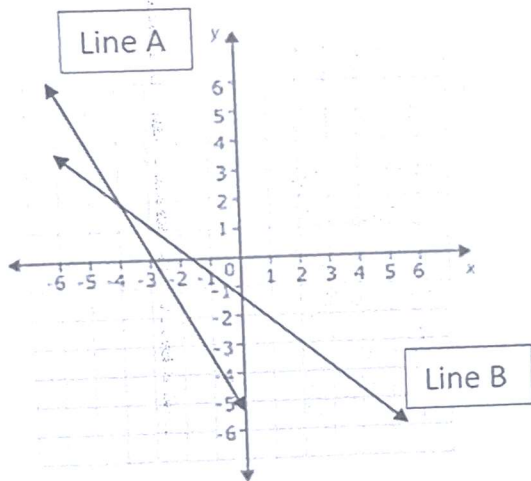
02. Do both lines have different slopes?

- (c) Yes
- (d) No

03. What is the solution to the system of equations to the left?

(2, -4)

Question 03



01. How many solutions are there to the system of equations to the left?

- (g) One solution
- (h) No solutions
- (i) Infinite solutions

02. Do both lines have different slopes?

- (e) Yes
- (f) No

03. What is the solution to the system of equations to the left?

(-4, 2)